


Number Fun 13

Write the partners of 9


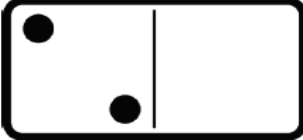

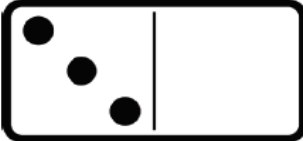
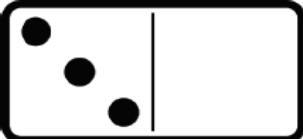

1	○	8	○
5	○	3	○
6	○	7	○


Draw 10 hearts

Fill in the numbers between

0	○	○	3		7	○	○	10
4	○	○	7		1	○	○	4

Fill in dots to make the totals.

	7		6
	10		5
	8		9



Number Fun 14

Write the partners of 10

4	○	2	○
3	○	9	○
7	○	10	○

Draw 11 cupcakes


Complete the counting

19	18	○	16	○	○	○	○	○
11	12	○	○	15	○	○	○	○

Fill in dots to make the totals.

	10		8
	6		9
	7		6

Colour the flags in an AABBCD pattern.



Number Fun 15

Make each number 3 less

8 ○

10 ○

3 ○

5 ○

9 ○

6 ○

Make each number 3 more

0 ○

4 ○

7 ○


6 ○

2 ○

3 ○

Complete the counting

○ 6 7 ○ 9 ○ ○ ○ ○ ○
○ 17 16 15 ○ ○ ○ ○ ○



Write the number names.

10

6

9

Calculate.

$7 - 4 = \text{○}$

$5 - 3 = \text{○}$

$7 - 2 = \text{○}$