


# Making 8


Draw more legs on each spider to give it 8 legs




1 and  make 8




2 and  make 8




3 and  make 8



4 and  make 8




5 and  make 8



6 and  make 8



7 and  make 8



8 and  make 8

# Number Fun 8

Write the partners of 6

3	○	2	○
5	○	4	○
0	○	1	○

Draw 7 ice-creams.

Colour odd numbers red and even numbers blue.

7      6      8      5      3      4

How many smarties on the cupcakes?

 ○

Write the number names.

3

4

5

Calculate.

$3 - 3 = \bigcirc$

$6 - 1 = \bigcirc$

$2 - 0 = \bigcirc$

\*\*\*Colour the flags in an ABA pattern.\*\*\*



# Number Fun 9

Colour the biggest number

5	8	3	1
7	5	4	10
2	4	9	6


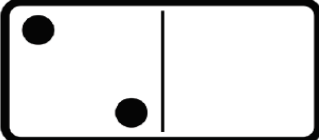
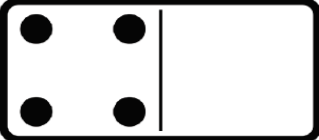
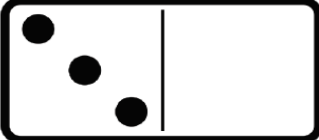
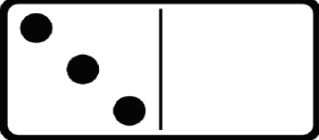

Make each number 2 more

1	○	5	○
8	○	6	○
3	○	7	○

Fill in the numbers between

2	○	○	5	♥	5	○	○	8
3	○	○	6		7	○	○	10

Fill in dots to make the totals.

	8		9
	7		8
	6		10

\*\*\*Colour the flags in an ABCA pattern.\*\*\*

