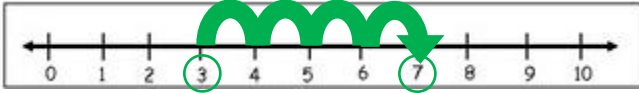


Word problems with number lines

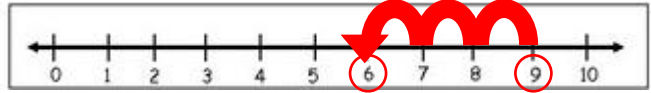
Addition/Plus: you will hop forward →



I have 3 fish in my fish tank. Mom buys me 4 more fish. How many fish do I have altogether?

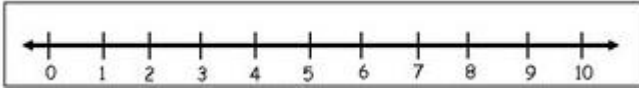
$$3 + 4 = 7$$

Subtraction/Minus: you will hop backwards ←

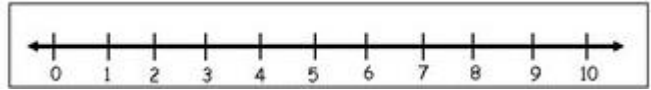


There are 9 apples hanging in the tree. 3 apples fall out of the tree. How many apples are left hanging in the tree?

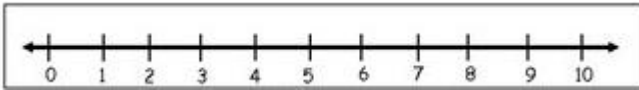
$$9 - 3 = 6$$



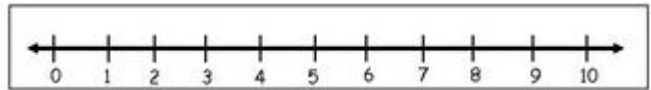
I have 4 Barbies and my sister has 4 Barbies. How many Barbies do we have altogether?



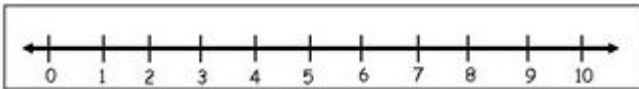
I baked 8 muffins. My dad came home and ate 3 of the muffins. How many muffins are left over?



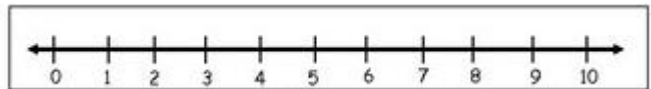
I have 2 Fizzers in my party and 4 marshmallows. How many sweets do I have altogether?




Mom bought 6 eggs. By a mistake she dropped 4. How many eggs are left in the box?



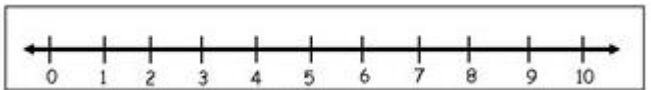
My brother has 6 marbles. His friend gives him 3 more marbles. How many marbles does he have altogether?



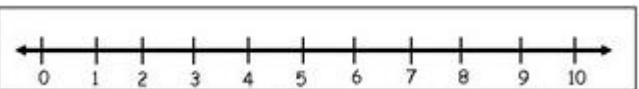
There are 7 butterflies in my garden. 5 butterflies fly away. How many butterflies are left in my garden?



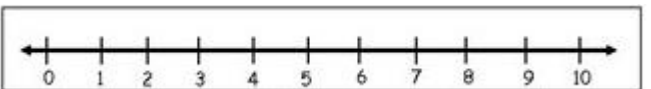
I have 7 Jojo Bows. My granny makes me 3 more Jojo Bows. How many Jojo bows do I have altogether?



I have 10 stickers in my sticker book. I give 5 stickers to my friend. How many stickers do I have left?



I built 2 puzzles with my granny. Then I built 2 more puzzles with my grandpa. How many puzzles did I build altogether?



I have 5 bunches of flowers. I give 4 bunches away. How many bunches are left?